



INDIAN SCHOOL AL WADI AL KABIR

DEPARTMENT OF MATHEMATICS (2023 – 2024)

TOPIC: NUMBER CONCEPTS (101-200)

WORKSHEET 1

RESOURCE PERSON: Ms. Mariyam L

NAME: _____ CLASS: II SEC: _____ DATE: _____

Q1. Write the number names for the given numbers. Do not forget to begin the number name with a capital letter.

1. 175 - _____

2. 200 - _____

3. 100 - _____

4. 163 - _____

5. 119 - _____







Scan here to view the answer key

Q2. Fill the missing numbers with numbers before, after or between.

Before

Between

After



Q3a. Shade the box with the largest number.

113

189

163

Q3b. Shade the box with the smallest number.

200

145

126

Q4. Write the place and place value of the given numbers.

104

200

PLACE

PLACE
VALUE

PLACE

PLACE
VALUE

Q5. Write the place and place value of the underlined digit.

NUMBER	PLACE	PLACE VALUE
1 <u>8</u> 6		
15 <u>1</u>		
<u>1</u> 35		